

# Maths




Friday 8<sup>th</sup> January 2021

2D shapes

Task 1: Can you name the 2D shapes?

Task 2: Can you count the sides on the 2D shapes?  
(a circle has one continuous side)

Task 3: Can you count the corners?



Please send your Teacher a picture of your work on Class Dojo.