

# Maths

Wednesday 24<sup>th</sup> February 2021

## Counting up to 15

For this lesson, you will need 15 small objects to count and number cards to 15.

Please click the link for this week's Maths. Today is Lesson 3.

All of the Maths tasks are on the video.

<https://classroom.thenational.academy/units/numbers-within-15-7d41>

If you cannot access the video, follow this worksheet.


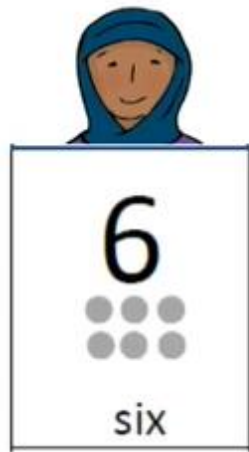

1. Look at the picture below:

- How many orange flowers are there?
- Can you use your counting objects to represent the number you have just counted?
  - Can you count the spotty bowls?
- Can you use your counting objects to represent the number you have just counted?

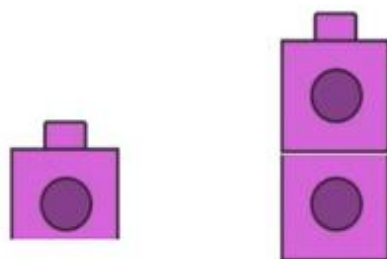
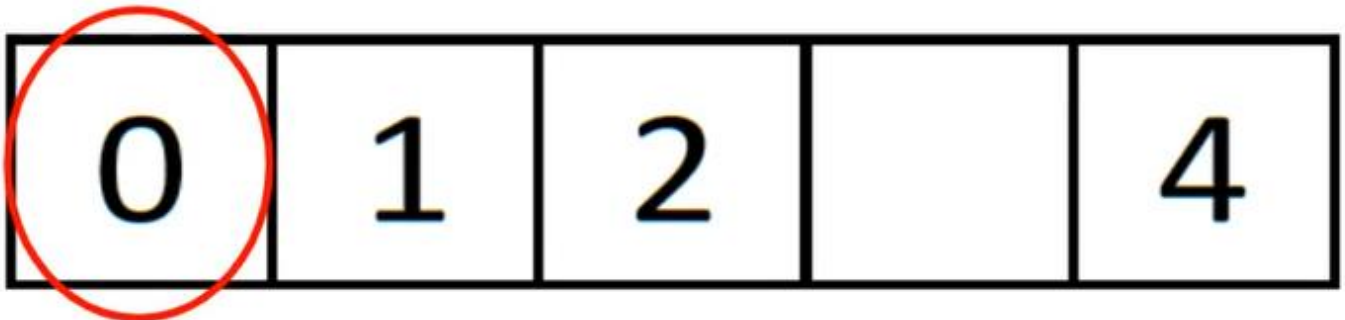


2. What numbers do each of the children below have?

- Can you represent each of the numbers using your counting objects?
- Who has the most?
- Who has the least?
- Can you put the three numbers in order from smallest to largest?

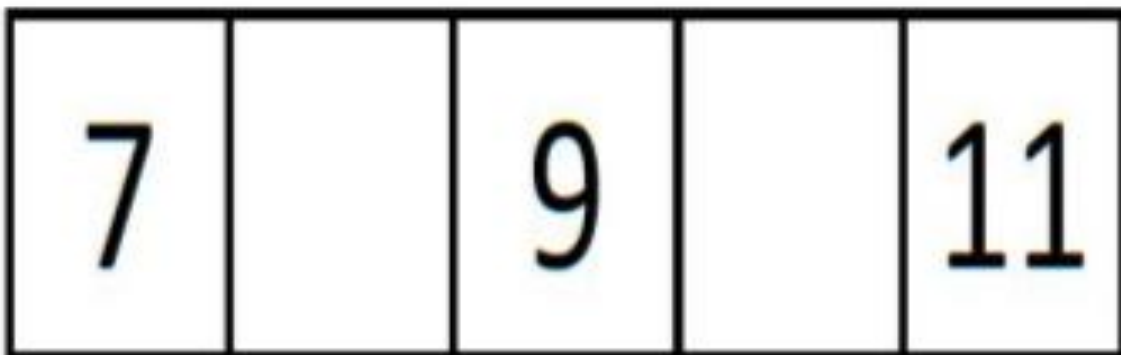
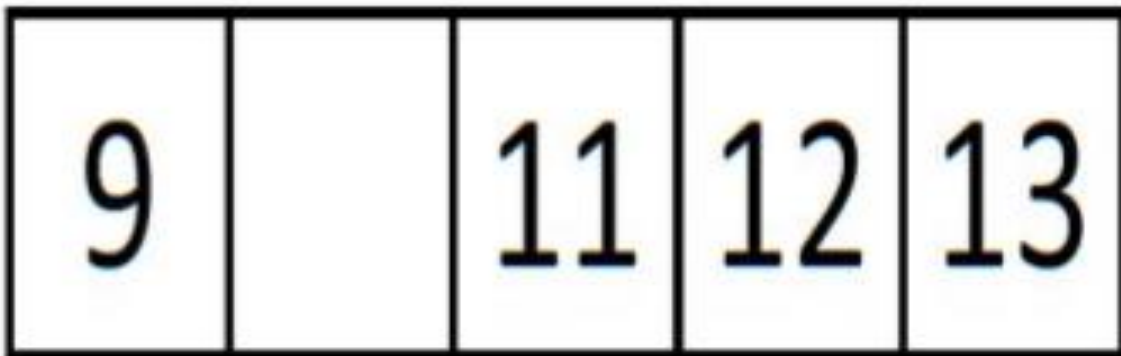


3. Can you use your counting object to represent the numbers on the number line below? Can you figure out which number is missing?



Main task:

Can you represent the numbers on the number tracks below and fill in the missing numbers?



Please send your Teacher a picture of you watching the video or answering the questions on Class Dojo.