

# Maths

Thursday 21<sup>st</sup> January 2021

Counting up to 9 objects reliably.

For this lesson, you will need 10 small objects to count some number cards and a 10 frame. Either draw or print this.


Please click the link for this week's Maths. Today is Lesson 4.

All of the Maths tasks are on the video.

<https://classroom.thenational.academy/units/numbers-within-10-767b>

If you cannot access the video, follow this worksheet.

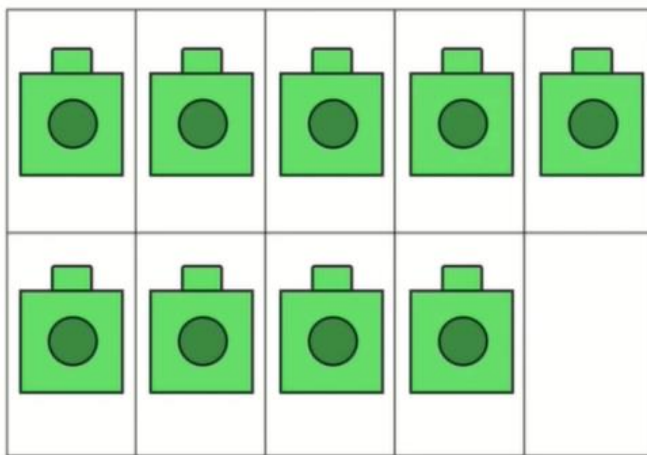
1. Can you practise writing your numbers 1-9?

1	2	3	4	5	6	7	8	9
---	---	---	---	---	---	---	---	---


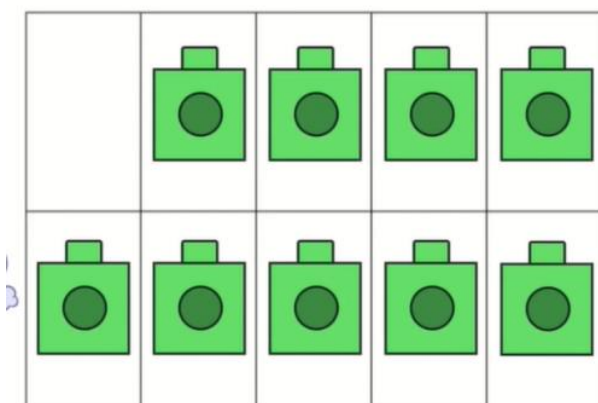
2. Look at the picture. How many ducks can you see? How many frogs are there? How many frogs and ducks are there altogether Can you find something there is 9 of?




3. Can you represent 9 on your ten frame?



4. What has happened to the ten from now? Is it still 9?

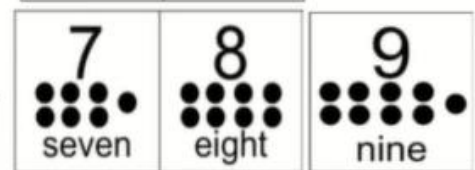
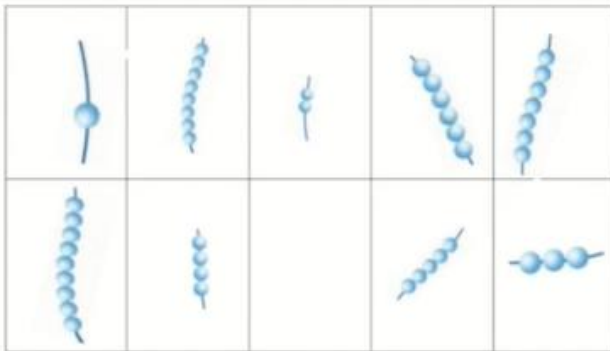


5. Do both of these number blocks represent 9? How do you know?



Main task:

## II Main Task



Can you choose a number and then match it to the bead card below?

Please send your Teacher a picture of you watching the video or answering the questions on Class Dojo.