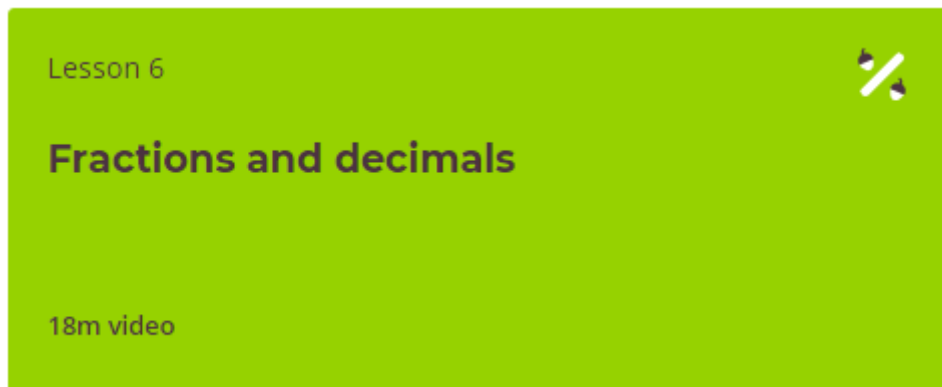


Y5 Maths Wednesday 20/1/21

Click on the link below.

[Fractions and decimals - Oak National Academy
\(thenational.academy\)](https://www.thenational.academy)







Then click on this button on the web page to do today's lesson.



I have attached a copy of the worksheets, if you would like to print them. If you do not have a printer, then please complete the questions on paper and upload a photograph of them onto Class Dojo.

Once you've completed the lesson, there are activities on Mathletics linked to today's work.

Match the different representations of fractions and decimals and explain your choice

	0.02	0.2	$\frac{42}{100}$	$\frac{2}{100}$		0.42	
0.35		$\frac{53}{100}$	$\frac{2}{10}$		$\frac{24}{100}$	$\frac{1}{50}$	$\frac{20}{100}$
$\frac{1}{5}$	$\frac{200}{1000}$	$\frac{21}{50}$	0.24	$\frac{35}{100}$	0.53		$\frac{7}{20}$