

Y5 Maths Monday 8/2/21

Click on the link below.

<https://classroom.thenational.academy/units/2-d-shape-perimeter-and-area-9929>

Then click on this button on the web page to do today's lesson.



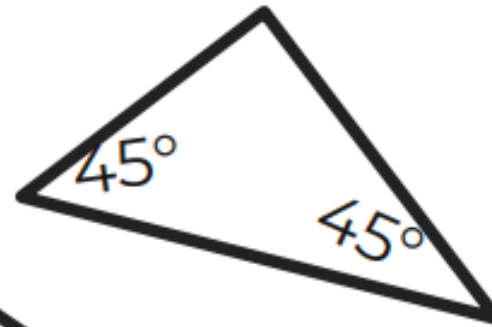
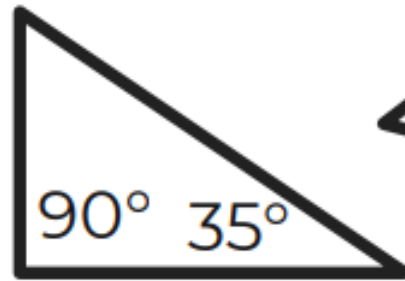
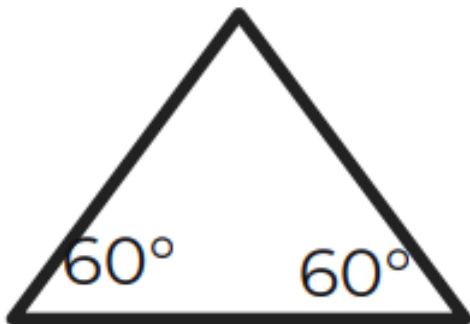
I have attached a copy of the worksheet, if you would like to print them. If you do not have a printer, then please complete the questions on paper and upload a photograph of them onto Class Dojo.

Once you've completed the lesson, there are activities on Mathletics linked to today's work.

Independent task

Write the name of each triangle.

Then find the missing angles of the triangles.



Not drawn to scale.