
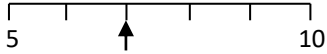


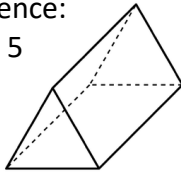
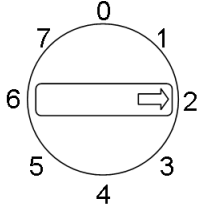


Name: _____

Date: _____

Class/Group: _____

A: Place Value, Add and Subtract		B: Multiply, Divide and Fractions		C: Measure and Geometry	
1. What is the missing number? 36 46 56 66 76 <input type="text"/>	2:1	11. $7 \times 5 =$	2:11	21. Which of these has the smallest capacity? a. a bath b. a bucket c. a cup	2:18
2. Circle the 3s that have a value of 30 . 13 38 43 31	2:2	12. Which are the odd numbers? 7 14 21 28	2:11		
3. What number is labelled? 	2:3	13. What symbol is missing? 6×3 <input type="text"/> 18	2:12	22. How many hours are there in 1 day? a. 12 b. 24 c. 60	2:21
4. Put these in order, smallest first. 65 6 5 56	2:4	14. What symbol is missing? 20 <input type="text"/> 5 = 4	2:12		
5. Write this number in words. 84	2:5	15. Is this true? Write 'yes' or 'no'. $18 \div 6 = 6 \div 18$	2:13	23. Which of these shapes has 3 sides? a. triangle b. circle c. square	2:23
6. A garden has 8 trees. 6 more are planted. How many trees now?	2:6	16. 6 flowers each have 4 petals. How many petals are there in total?	2:14		
7. Use $8 + 12 = 20$ to answer: $24 +$ <input type="text"/> $= 60$	2:7	17. I have 24 eggs. If they come in boxes of 6, how many boxes do I have?	2:14	24. Complete the sentence: A triangular prism has 5 a. vertices b. edges c. faces	2:24
8. $4 + 8 + 7 =$	2:8	18. What fraction of the strawberries is circled? 	2:15		
9. Tick (✓) if true: $62 + 9 = 9 + 62$ <input type="checkbox"/> $42 - 9 = 9 - 42$ <input type="checkbox"/>	2:9	19. Write the fraction two thirds in numerals.	2:15	25. This dial is pointing at 2. What number will it point to after being turned clockwise through 1 right angle? 	2:28
10. Use $46 - 13 = 33$ to help find: $33 + 13 =$ <input type="text"/>	2:10	20. What is $\frac{1}{4}$ of 16 ?	2:16		
Total (A)		Total (B)		Total (C)	
Test Total (A+B+C)		R (0-9)	Y (10-19)	G (20-25)	