


CIRCLES Maths Week 7 – Monday 22nd February

This unit will look at numbers to 50. It will help you to understand what the numerals mean in numbers too.


Task 1: Count forwards and backwards starting at 10 and go to 50. Can you do this in steps of 1? Can you do this in steps of 10? Can you start at a different number between 10 and 50 – start at 23 for example.

Task 2: Look at the sequences of numbers. Write in the missing numbers. Take care with your formation.

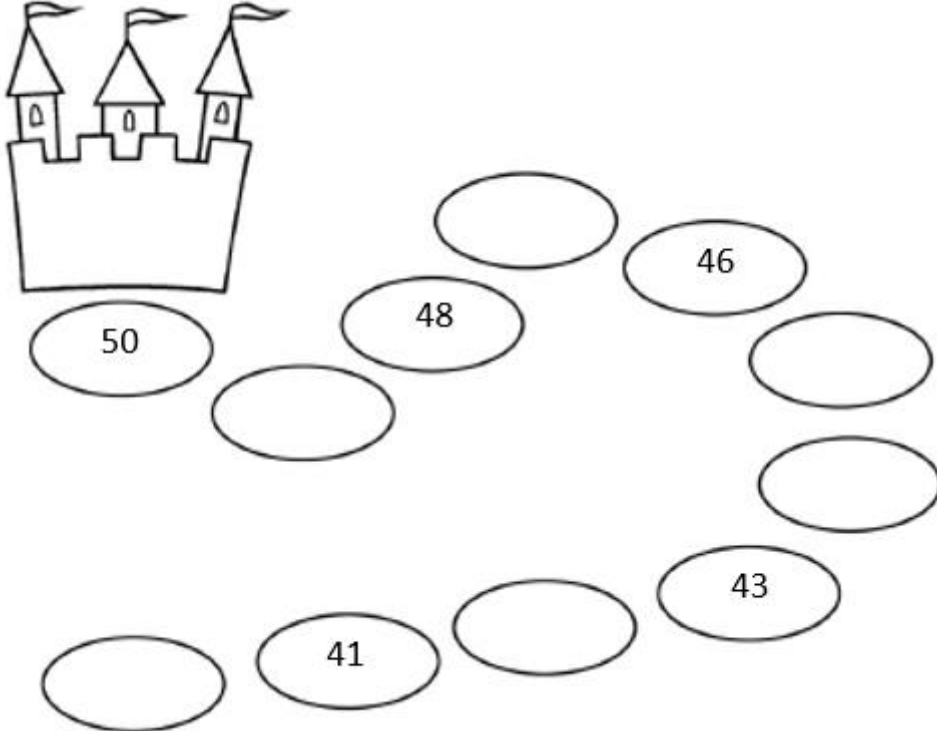
a)



b)



c)



CHALLENGE: Explain how you completed each sequence. Remember to use full sentences.

For example: The sequence increases by steps of 5