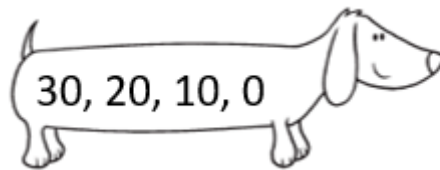
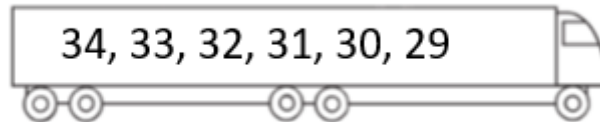


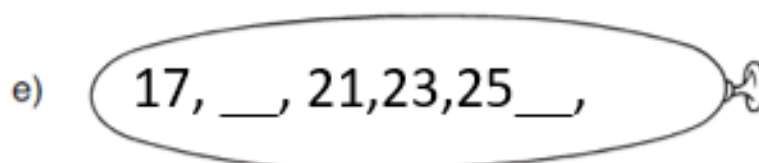
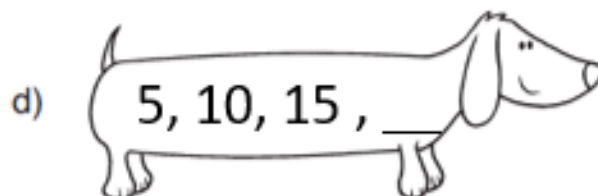
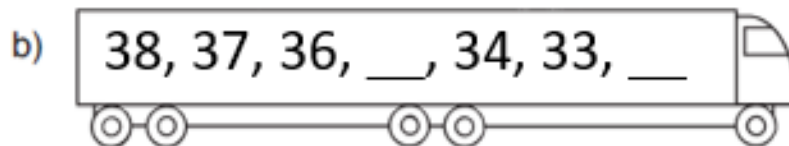
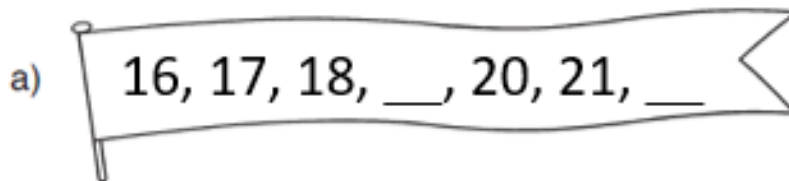
## CIRCLES Maths Week 8 – Thursday 4<sup>th</sup> March

This is the final lesson in this unit. You are going to think about different patterns of numbers and how they are increasing or decreasing.

**Task 1:** Describe the patterns shown below. How do they increase or decrease?



**Task 2:** Complete the patterns below. You can write your answers on the sheet or on your own paper.



**CHALLENGE:** How do they increase or decrease? You can write your answer or tell someone how the patterns have been completed.