





Name: _____

Date: _____

Class/Group: _____

A: Place Value, Add and Subtract		B: Multiply, Divide and Fractions		C: Measure and Geometry	
1. What is the missing number? 0 2 4 6 8 <input type="text"/> 12	2:1	11. $60 \div 5 =$	2:11	21. Estimate the capacity of a glass. Write a, b or c. a. about 3 litres b. about 30 millilitres c. about 300 millilitres	2:17
2. What is the value of the 7 in this number? 73	2:2	12. Which are the odd numbers? 7 14 21 28	2:11		
3. What number is labelled? 	2:3	13. What symbol is missing? $3 \square 9 = 27$	2:12	22. How many two pence (2p) coins are the same value as a twenty pence (20p) coin?	2:19
4. Which numbers are < 12 ? 12 10 5 15	2:4	14. What symbol is missing? $21 \div 7 \square 3$	2:12		
5. Write this number in numerals. forty one	2:5	15. Is this true? Write 'yes' or 'no'. $30 \div 10 = 10 \div 30$	2:13	23. Katie has sixty pence (60p). She spends forty-five pence (45p). How much money does she have left?	2:20
6. There are 30 children in a class. 16 are girls. How many are boys?	2:6	16. 3 children share 18 sweets. How many sweets does each child get?	2:14		
7. $20 - 15 =$	2:7	17. 8 teams enter a 5-a-side contest. How many players are in the contest?	2:14	24. Which is longest? Write a, b, or c. a. half an hour b. 40 minutes c. three quarters of an hour	2:21
8. $82 - 10 =$	2:8	18. Write the fraction one third in numerals.	2:15		
9. Is this true? Write 'yes' or 'no'. $25 + 16 = 16 + 25$	2:9	19. One quarter of a cake is eaten. How many quarters are left?	2:15	25. Draw the hands to show Ten minutes to six.	2:22
10. Use $14 + 58 = 72$ to help find: $72 - 58 = \square$	2:10	20. What is $\frac{1}{2}$ of 28 ?	2:16		
Total (A)		Total (B)		Total (C)	
Test Total (A+B+C)		R (0-9)	Y (10-19)	G (20-25)	