







Name: _____

Date: _____

Class/Group: _____

A: Place Value, Add and Subtract		B: Multiply, Divide and Fractions		C: Measure and Geometry	
1. What is the missing number? 87 77 67 57 47 <input type="text"/>	2:1	11. $90 \div 10 =$	2:11	21. Tim has twenty pence (20p). Tick the coins that have the same value.	2:19
2. What is the value of the 9 in this number? 92	2:2	12. Which are the even numbers? 2 17 16 23	2:11		
3. Draw an arrow to label 8. 	2:3	13. What symbol is missing? $35 = 5 \square 7$	2:12	22. Sam has fifty pence (50p). He buys an apple for thirty pence (30p). How much change does Sam get?	2:20
4. Use <, > or = to make this correct: $2 \times 4 \square 5 + 3$	2:4	14. What symbol is missing? $4 = 32 \square 8$	2:12		
5. Write this number in numerals. thirty nine	2:5	15. Tick (✓) if true: $8 \div 4 = 4 \div 8 \square$ $9 \times 7 = 7 \times 9 \square$	2:13	23. What time does this clock show?	2:22
6. There are 29 people on a train. 16 get off. How many people now?	2:6	16. 4 boys share 20 chocolates. How many chocolates does each boy get?	2:14		
7. $20 - \square = 14$	2:7	17. 4 bags each contain 6 apples. How many apples are there in total?	2:14	24. Favourite ice-cream flavours of some pupils are shown below.	2:29
8. $67 - 10 =$	2:8	18. What fraction is shaded? 	2:15		
9. Is this true? Write 'yes' or 'no'. $27 + 7 = 7 + 27$	2:9	19. How many quarters are in 1 whole?	2:15	How many pupils chose chocolate?	
10. Use $92 = 23 + 69$ to help find: $92 - 69 = \square$	2:10	20. Complete the equivalent fractions. $\frac{1}{2} = \frac{2}{\square}$	2:16	25. How many pupils were asked in total?	2:30
Total (A)		Total (B)		Total (C)	
Test Total (A+B+C)		R (0-9)	Y (10-19)	G (20-25)	