



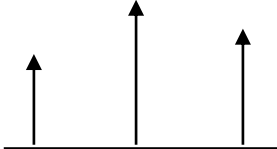

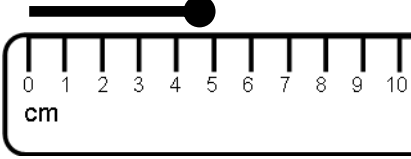
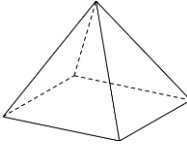




Name: _____

Date: _____

Class/Group: _____

A: Number and Place Value		B: Fractions and Measure		C: Measure and Geometry	
1. What is the missing number? 0 <input type="text"/> 2 3 4	1:1	11. Circle half ($\frac{1}{2}$) of the sweets. 	1:11	16. I go to bed in the: a. morning b. afternoon c. evening.	 1:16
2. What is the missing number? 2 <input type="text"/> 6 8 10	1:2		1:12		
3. What number is one more than 24?	1:3	12. Colour in $\frac{1}{4}$ of this shape. 	1:12	17. What month comes before April? a. February b. May c. March	1:17
4. What number is labelled? 	1:4				
5. Write this number in words: 4	1:5	13. Circle the shortest arrow. 	1:13	18. What time does this clock show? 	1:18
6. What symbol is missing? 8 <input type="text"/> 5 = 13	1:6				
7. What is the missing number? 10 - 9 = <input type="text"/>	1:7	14. How long is the matchstick? 	1:14	19. What is this shape? a. cuboid b. pyramid c. sphere	 1:19
8. 19 + 4 =	1:8				
9. Tom has 5 apples. Kim has 8 apples. How many apples altogether?	1:9	15. How much altogether? 	1:15	20. The teddy bear is: a. on the chair. b. under the chair. c. next to the chair.	 1:20
10. 10 pens are shared by 2 children. How many pens do they get each?	1:10				
Total (A)		Total (B)		Total (C)	
Test Total (A+B+C)		R (0-7)	Y (8-15)	G (16-20)	